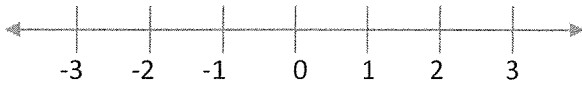
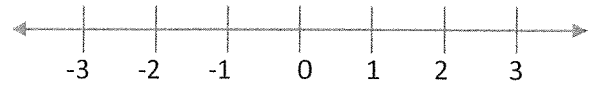


Graph the inequality on the number line.

1) $n > 2$



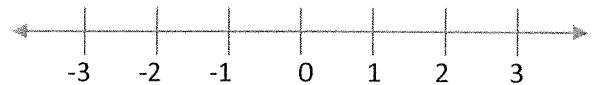
4) $x \geq 0$



2) $h \leq 3$



5) $p < -2$



3) $k < -1$

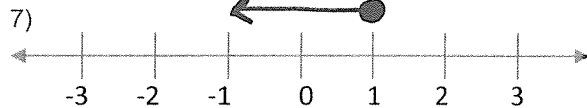


6) $y \geq -3$



Write the inequality that matches the graph.

Remember to include: a variable, an inequality symbol and a number in your answer.



Write an inequality to represent the statement below.

Remember: every answer should have a variable, an inequality symbol and a number.

9) I am allowed at most 2 hours of screen time each day.

13) At least 10 students applied for student council.

10) United States senators need to be at least 30 years old.

14) I can attach at most 25 megabytes to the email.

11) There is space for no more than 34 desks in the classroom.

15) I have less than 10 emails in my inbox.

12) We are expected to get more than 1 inch of rain today.

16) I hope it snows more than 6 inches overnight.
