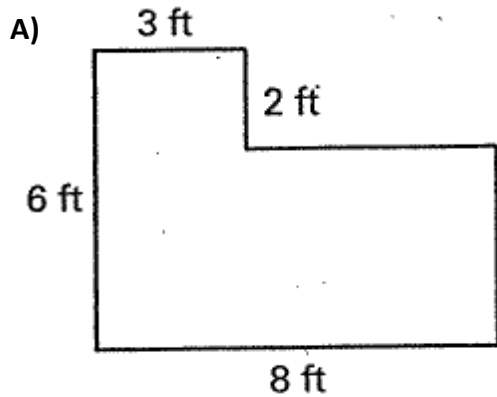


### 1.6 Perimeter & Area

Name \_\_\_\_\_

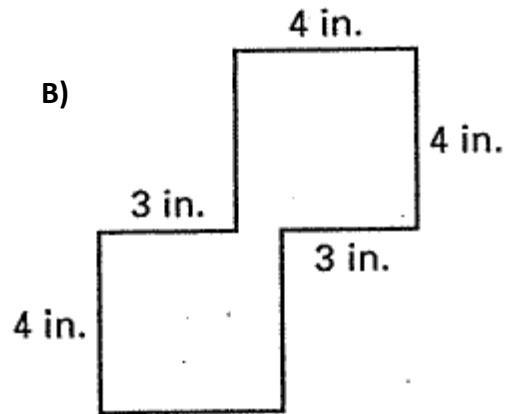
Find any missing side lengths.

Find the perimeter and area of each figure.



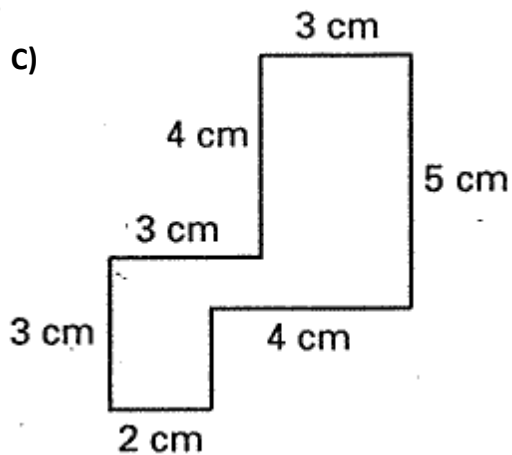
Perimeter = \_\_\_\_\_

Area = \_\_\_\_\_



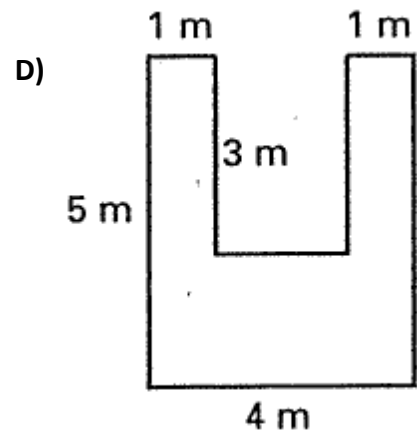
Perimeter = \_\_\_\_\_

Area = \_\_\_\_\_



Perimeter = \_\_\_\_\_

Area = \_\_\_\_\_



Perimeter = \_\_\_\_\_

Area = \_\_\_\_\_